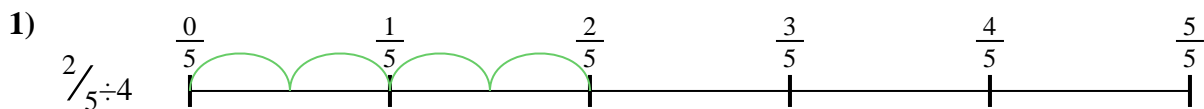


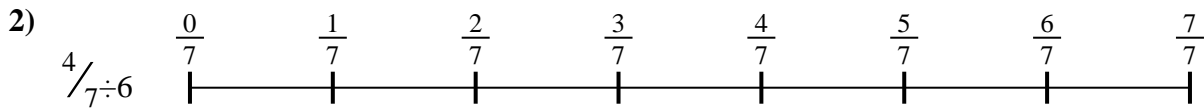


Use the numberline to solve each problem. The first is marked for you.


**Answers**



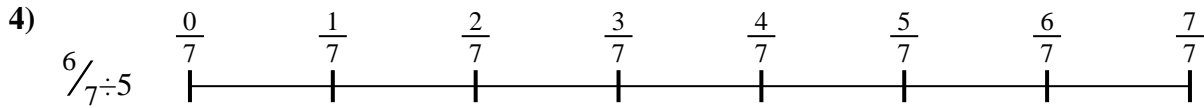
1. \_\_\_\_\_




2. \_\_\_\_\_




3. \_\_\_\_\_



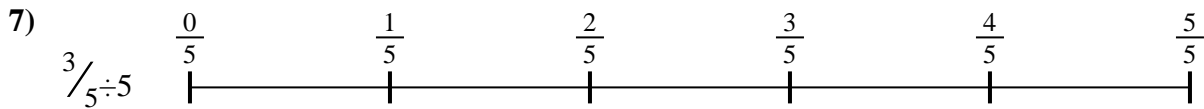
4. \_\_\_\_\_




5. \_\_\_\_\_



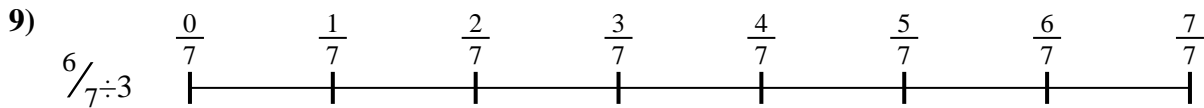
6. \_\_\_\_\_



7. \_\_\_\_\_



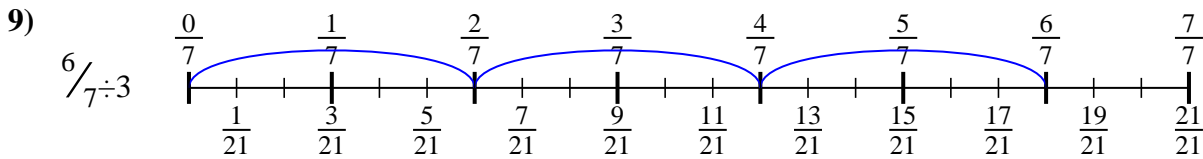
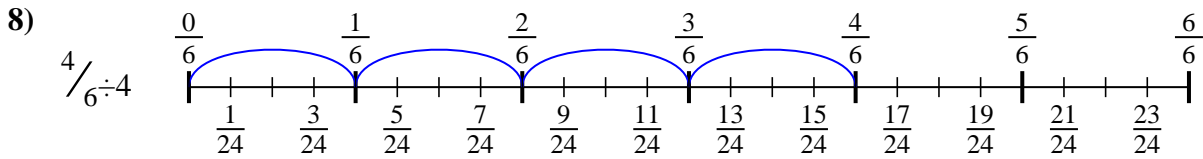
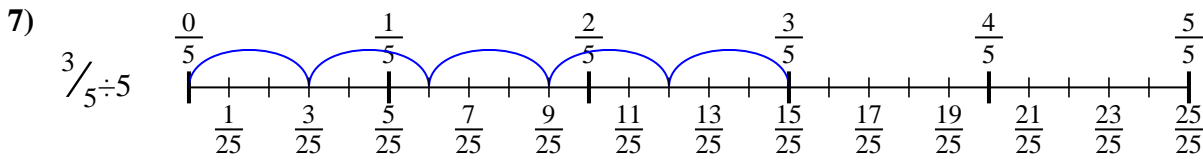
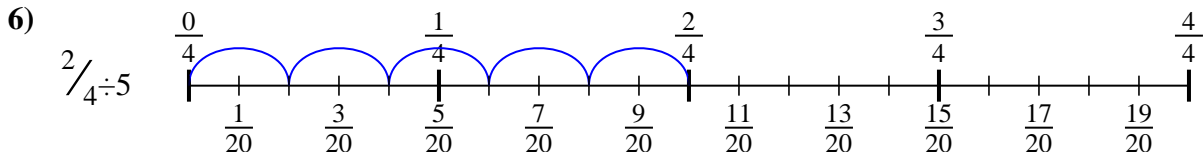
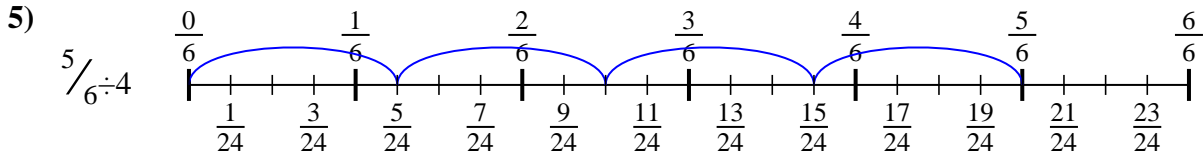
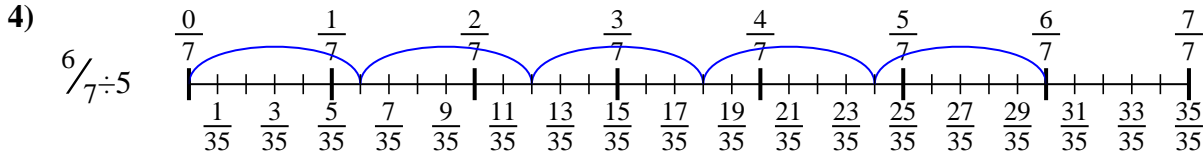
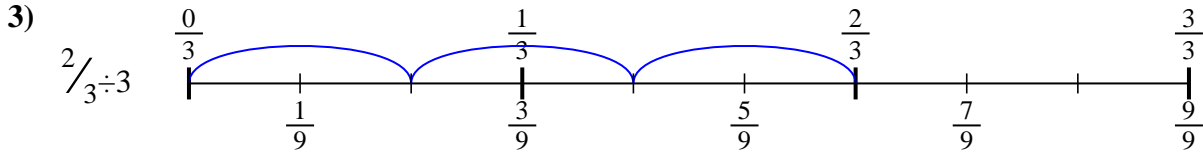
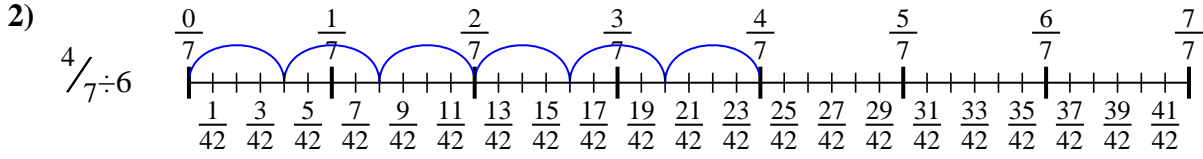
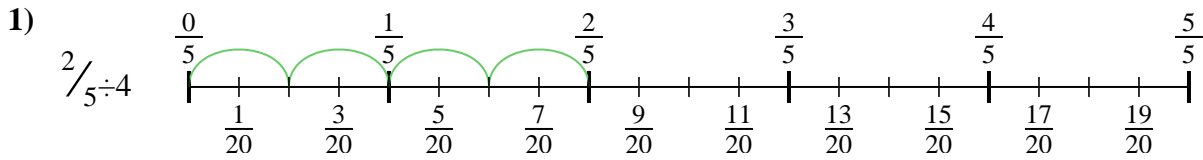
8. \_\_\_\_\_



9. \_\_\_\_\_



Use the numberline to solve each problem. The first is marked for you.



**Answers**

1.  $\frac{2}{20}$
2.  $\frac{4}{42}$
3.  $\frac{2}{9}$
4.  $\frac{6}{35}$
5.  $\frac{5}{24}$
6.  $\frac{2}{20}$
7.  $\frac{3}{25}$
8.  $\frac{4}{24}$
9.  $\frac{6}{21}$



Use the numberline to solve each problem. The first is marked for you.

**Answers**

$\frac{6}{35}$

$\frac{3}{25}$

$\frac{2}{20}$

$\frac{4}{42}$

$\frac{4}{24}$

$\frac{6}{21}$

$\frac{5}{24}$

$\frac{2}{20}$

$\frac{2}{9}$

1)

2)

3)

4)

5)

6)

7)

8)

9)

1. \_\_\_\_\_

2. \_\_\_\_\_

3. \_\_\_\_\_

4. \_\_\_\_\_

5. \_\_\_\_\_

6. \_\_\_\_\_

7. \_\_\_\_\_

8. \_\_\_\_\_

9. \_\_\_\_\_